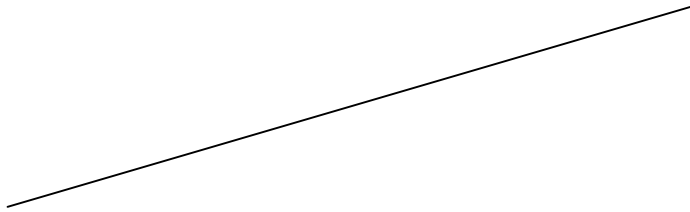
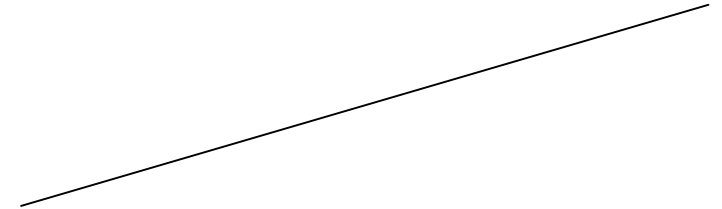


1. Draw 5 equally-spaced inclined lines normal to the given line using 2H pencil.

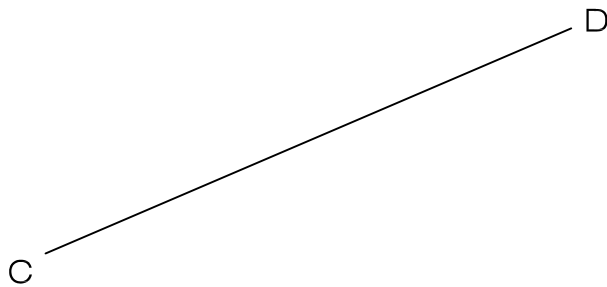


2. Draw 5 equally-spaced inclined lines parallel to the given line using 2H pencil.



3. Draw lines that pass through point A and make an angle of 45 deg. to line CD. Use 2H pencil.

A +



4. Construct a triangle that has base angles of 75 and 45 degs. from a given baseline AB.

